



F2 Home Learning

Maths – Counting

Tuesday 12th May 2020:

 **Maths Homework Challenge!**

Count the number of doors in your home. How many were open? How many were closed?



Card 13

Which room in your home had the most doors? How do you know?


Can you draw a chart to show what you found?

How many door are there altogether?


What would 1 more be?

What would 1 less be?

Thursday 14th May 2020:

 **Maths Homework Challenge!**

How many different places can you see the number 9 at home? Draw a picture of some things that have number 9.




Card 10

Can you search for other numbers?


Use a tally chart to help you.

Which number do you have the most of in your home?

Friday 15th May 2020:

 **Maths Homework Challenge!**

How many windows at the front of your home? How many at the back? Add them together. How did you do it? Choose a window to look out from. Then count how many windows on other homes you can see.



Card 5

Can you write your own addition number sentence e.g. $4 + 5 = 9$

What other things could you find around your home to count and add together?